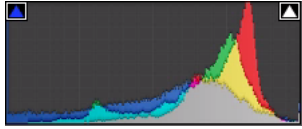


Histograma

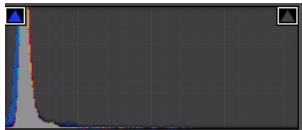
Qual histograma possui informação predominantemente na região dos pretos?

Selecione uma alternativa


A



B



C



D

